

Cambridge
International
AS & A Level

Cambridge International Examinations
Cambridge International Advanced Subsidiary and Advanced Level

GEOGRAPHY

9696/12

Paper 1 Core Geography

October/November 2015

INSERT

3 hours



READ THESE INSTRUCTIONS FIRST

This Insert contains all the Figures, Photographs and the Table referred to in the questions.

This document consists of **7** printed pages and **1** blank page.

Fig. 1 for Question 1

A storm hydrograph

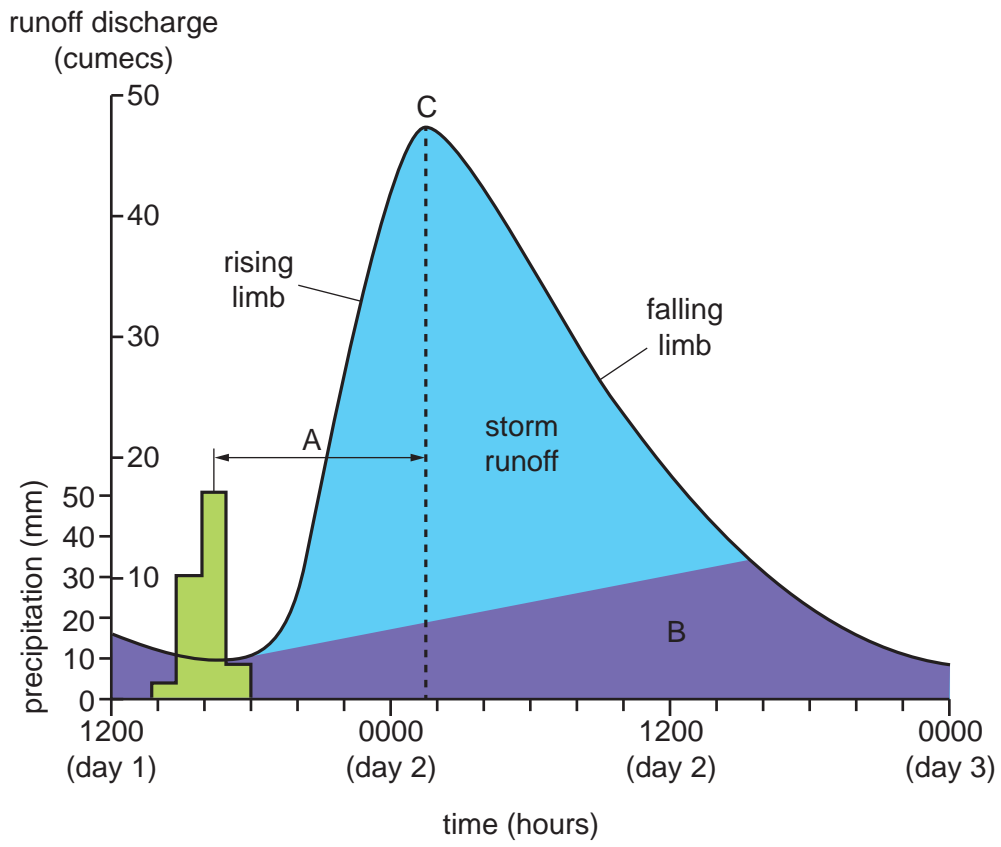
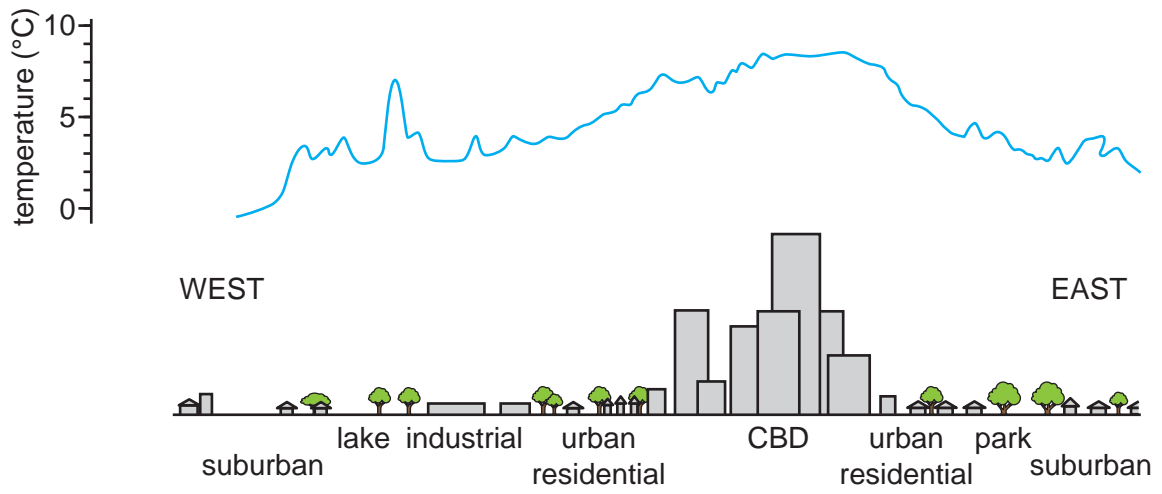


Fig. 2 for Question 2

Night time temperatures across an urban area



4

Photograph A for Question 3

A mudflow



Table 1 for Question 4

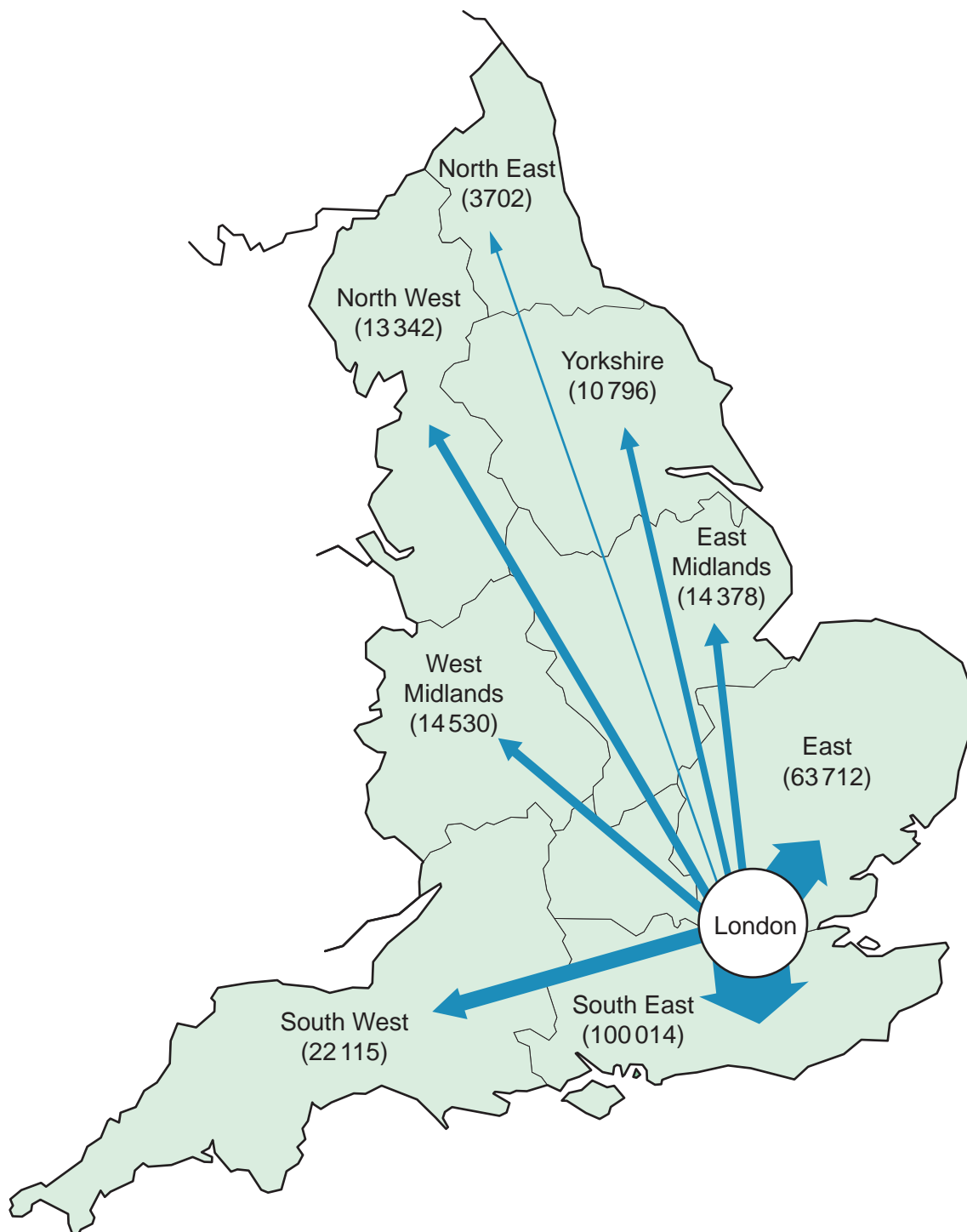
Number of people undernourished, by world region, in 1992 and 2012

world region	number of people undernourished (millions)	
	1992	2012
MEDCs	20	16
Oceania	1	1
Latin America and the Caribbean	65	49
East Asia	261	167
South-East Asia	134	65
South Asia	327	304
Central Asia	9	6
Middle East and North Africa	13	25
Sub-Saharan Africa	170	234
total	1000	867

People are undernourished when their food intake provides less than their minimum energy requirements.

Fig. 3 for Question 5

Migration from London to regions of England in 2012



The width of each arrow is proportional to the number of people migrating from London to regions of England.

Photograph B for Question 6

Part of the Central Business District (CBD) of a city in South-East Asia



BLANK PAGE

Permission to reproduce items where third-party owned material protected by copyright is included has been sought and cleared where possible. Every reasonable effort has been made by the publisher (UCLES) to trace copyright holders, but if any items requiring clearance have unwittingly been included, the publisher will be pleased to make amends at the earliest possible opportunity.

To avoid the issue of disclosure of answer-related information to candidates, all copyright acknowledgements are reproduced online in the Cambridge International Examinations Copyright Acknowledgements Booklet. This is produced for each series of examinations and is freely available to download at www.cie.org.uk after the live examination series.

Cambridge International Examinations is part of the Cambridge Assessment Group. Cambridge Assessment is the brand name of University of Cambridge Local Examinations Syndicate (UCLES), which is itself a department of the University of Cambridge.